

HOMework 5

NEURAL NETWORKS *

10-301 / 10-601 INTRODUCTION TO MACHINE LEARNING (FALL 2024)

<http://www.cs.cmu.edu/~mgormley/courses/10601/>

OUT: Wednesday, October 9

DUE: Sunday, October 27

TAs: Doris, Jenny, Rohan, Siyan, Zoe, Markov, Neural

Summary In this assignment, you will build an image recognition system using a neural network. In the Written component, you will walk through an on-paper example of how to implement a neural network. Then, in the Programming component, you will implement an end-to-end system that learns to perform image classification.

START HERE: Instructions

- **Collaboration Policy:** Please read the collaboration policy here: <http://www.cs.cmu.edu/~mgormley/courses/10601/syllabus.html>
- **Late Submission Policy:** See the late submission policy here: <http://www.cs.cmu.edu/~mgormley/courses/10601/syllabus.html>
- **Submitting your work:** You will use Gradescope to submit answers to all questions and code. Please follow instructions at the end of this PDF to correctly submit all your code to Gradescope.
 - **Written:** For written problems such as short answer, multiple choice, derivations, proofs, or plots, please use the provided template. Submissions can be handwritten onto the template, but should be labeled and clearly legible. If your writing is not legible, you will not be awarded marks. Alternatively, submissions can be written in \LaTeX . Each derivation/proof should be completed in the boxes provided. You are responsible for ensuring that your submission contains exactly the same number of pages and the same alignment as our PDF template. If you do not follow the template, your assignment may not be graded correctly by our AI assisted grader and there will be a **2% penalty** (e.g., if the homework is out of 100 points, 2 points will be deducted from your final score).
 - **Programming:** You will submit your code for programming questions on the homework to [Gradescope](#). After uploading your code, our grading scripts will autograde your assignment by running your program on a virtual machine (VM). You are only permitted to use [the Python Standard Library modules](#) and `numpy`. Ensure that the version number of your programming language environment (i.e. Python 3.9.12) and versions of permitted libraries (i.e. `numpy` 1.23.0)

*Compiled on Tuesday 8th October, 2024 at 20:41

match those used on Gradescope. You have 10 free Gradescope programming submissions, after which you will begin to lose points from your total programming score. We recommend debugging your implementation on your local machine (or the Linux servers) and making sure your code is running correctly first before submitting your code to Gradescope.

- **Materials:** The data and reference output that you will need in order to complete this assignment is posted along with the writeup and template on the course website.

Instructions for Specific Problem Types

For “Select One” questions, please fill in the appropriate bubble completely:

Select One: Who taught this course?

- ☒ Matt Gormley
- ☐ Marie Curie
- ☐ Noam Chomsky

If you need to change your answer, you may cross out the previous answer and bubble in the new answer:

Select One: Who taught this course?

- ☒ Henry Chai
- ☐ Marie Curie
- ☒ Noam Chomsky

For “Select all that apply” questions, please fill in all appropriate squares completely:

Select all that apply: Which are instructors for this course?

- ☒ Matt Gormley
- ☒ Henry Chai
- ☐ Noam Chomsky
- ☐ I don't know

Again, if you need to change your answer, you may cross out the previous answer(s) and bubble in the new answer(s):

Select all that apply: Which are the instructors for this course?

- ☒ Matt Gormley
- ☒ Henry Chai
- ☒ Noam Chomsky
- ☒ I don't know

For questions where you must fill in a blank, please make sure your final answer is fully included in the given space. You may cross out answers or parts of answers, but the final answer must still be within the given space.

Fill in the blank: What is the course number?

10-601

10-~~6~~301

Written Questions (33 points)

1 \LaTeX Point and Template Alignment (1 points)

1. (1 point) **Select one:** Did you use \LaTeX for the entire written portion of this homework?

☐ Yes

☐ No

2. (0 points) **Select one:** I have ensured that my final submission is aligned with the original template given to me in the handout file and that I haven't deleted or resized any items or made any other modifications which will result in a misaligned template. I understand that incorrectly responding yes to this question will result in a penalty equivalent to 2% of the points on this assignment.

Note: Failing to answer this question will not exempt you from the 2% misalignment penalty.

☐ Yes

2 Example Feed Forward and Backpropagation (15 points)

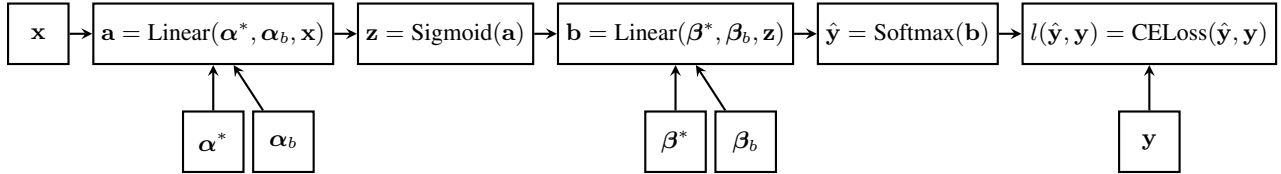


Figure 1: Computational Graph for a One Hidden Layer Neural Network

Network Overview Consider the neural network with one hidden layer shown in Figure 1. The input layer consists of 6 features $\mathbf{x} = [x_1, \dots, x_6]^T$, the hidden layer has 4 nodes $\mathbf{z} = [z_1, \dots, z_4]^T$, and the output layer is a probability distribution $\mathbf{y} = [y_1, y_2, y_3]^T$ over 3 classes (**1-indexed** such that y_i is the probability of label i).

α^* is the matrix of weights from the inputs to the hidden layer and β^* is the matrix of weights from the hidden layer to the output layer.

$\alpha_{j,i}^*$ represents the weight going to the node z_j in the hidden layer from the node x_i in the input layer (e.g. $\alpha_{1,2}^*$ is the weight from x_2 to z_1), and β^* is defined similarly. We will use a sigmoid activation function for the hidden layer and a softmax for the output layer.

The bias vectors α_b, β_b are defined such that the j th value of α_b (which we denote $\alpha_{j,b}$) is the bias value for a_j and the k th value of β_b is the bias value for b_k .

Network Details Equivalently, we define each of the following.

The input:

$$\mathbf{x} = [x_1, x_2, x_3, x_4, x_5, x_6]^T \quad (1)$$

Linear combination at the first (hidden) layer:

$$a_j = \alpha_{j,b} + \sum_{i=1}^6 \alpha_{j,i}^* \cdot x_i, \quad \forall j \in \{1, \dots, 4\} \quad (2)$$

Activation at the first (hidden) layer:

$$z_j = \sigma(a_j) = \frac{1}{1 + \exp(-a_j)}, \quad \forall j \in \{1, \dots, 4\} \quad (3)$$

Equivalently, we can write this as vector operation where the sigmoid activation is applied individually to each element of the vector \mathbf{a} :

$$\mathbf{z} = \sigma(\mathbf{a}) \quad (4)$$

Linear combination at the second (output) layer:

$$b_k = \beta_{k,b} + \sum_{j=1}^4 \beta_{k,j}^* \cdot z_j, \quad \forall k \in \{1, \dots, 3\} \quad (5)$$

Activation at the second (output) layer:

$$\hat{y}_k = \frac{\exp(b_k)}{\sum_{l=1}^3 \exp(b_l)}, \quad \forall k \in \{1, \dots, 3\} \quad (6)$$

Loss We will use cross entropy loss, $\ell(\hat{\mathbf{y}}, \mathbf{y})$. If \mathbf{y} represents our target output, which will be a one-hot vector representing the correct class, and $\hat{\mathbf{y}}$ represents the output of the network, the loss is calculated by:

$$\ell(\hat{\mathbf{y}}, \mathbf{y}) = - \sum_{i=1}^3 y_i \log(\hat{y}_i) \quad (7)$$

For the below questions use natural log in the equation.

Prediction When doing prediction, we will predict the argmax of the output layer. For example, if $\hat{y}_1 = 0.3, \hat{y}_2 = 0.2, \hat{y}_3 = 0.5$ we would predict class 3. If the true class from the training data was 2 we would have a one-hot vector \mathbf{y} with values $y_1 = 0, y_2 = 1, y_3 = 0$.

1. In the following questions you will derive the matrix and vector forms of the previous equations which define our neural network. These are what you should hope to program in order to keep your program under the Gradescope time-out.

When working these out it is important to keep a note of the vector and matrix dimensions in order for you to easily identify what is and isn't a valid multiplication. Suppose you are given a training example: $\mathbf{x}^{(1)} = [x_1, x_2, x_3, x_4, x_5, x_6]^T$ with **label class 2**, so $\mathbf{y}^{(1)} = [0, 1, 0]^T$. We initialize the network weights as:

$$\boldsymbol{\alpha}^* = \begin{bmatrix} \alpha_{1,1} & \alpha_{1,2} & \alpha_{1,3} & \alpha_{1,4} & \alpha_{1,5} & \alpha_{1,6} \\ \alpha_{2,1} & \alpha_{2,2} & \alpha_{2,3} & \alpha_{2,4} & \alpha_{2,5} & \alpha_{2,6} \\ \alpha_{3,1} & \alpha_{3,2} & \alpha_{3,3} & \alpha_{3,4} & \alpha_{3,5} & \alpha_{3,6} \\ \alpha_{4,1} & \alpha_{4,2} & \alpha_{4,3} & \alpha_{4,4} & \alpha_{4,5} & \alpha_{4,6} \end{bmatrix}$$

$$\boldsymbol{\beta}^* = \begin{bmatrix} \beta_{1,1} & \beta_{1,2} & \beta_{1,3} & \beta_{1,4} \\ \beta_{2,1} & \beta_{2,2} & \beta_{2,3} & \beta_{2,4} \\ \beta_{3,1} & \beta_{3,2} & \beta_{3,3} & \beta_{3,4} \end{bmatrix}$$

We want to also consider the bias term and the weights on the bias terms ($\alpha_{j,b}$ and $\beta_{k,b}$). To account for these we can add them as a new column to the beginning of our initial weight matrices to represent biases, (e.g. $\alpha_{1,0} = \alpha_{1,b}$).

$$\alpha = \begin{bmatrix} \alpha_{1,0} & \alpha_{1,1} & \alpha_{1,2} & \alpha_{1,3} & \alpha_{1,4} & \alpha_{1,5} & \alpha_{1,6} \\ \alpha_{2,0} & \alpha_{2,1} & \alpha_{2,2} & \alpha_{2,3} & \alpha_{2,4} & \alpha_{2,5} & \alpha_{2,6} \\ \alpha_{3,0} & \alpha_{3,1} & \alpha_{3,2} & \alpha_{3,3} & \alpha_{3,4} & \alpha_{3,5} & \alpha_{3,6} \\ \alpha_{4,0} & \alpha_{4,1} & \alpha_{4,2} & \alpha_{4,3} & \alpha_{4,4} & \alpha_{4,5} & \alpha_{4,6} \end{bmatrix}$$

$$\beta = \begin{bmatrix} \beta_{1,0} & \beta_{1,1} & \beta_{1,2} & \beta_{1,3} & \beta_{1,4} \\ \beta_{2,0} & \beta_{2,1} & \beta_{2,2} & \beta_{2,3} & \beta_{2,4} \\ \beta_{3,0} & \beta_{3,1} & \beta_{3,2} & \beta_{3,3} & \beta_{3,4} \end{bmatrix}$$

We then add a corresponding new first dimension to our input vectors, always set to 1 ($x_0^{(i)} = 1$), so our input becomes:

$$\mathbf{x}^{(1)} = [1, x_1, x_2, x_3, x_4, x_5, x_6]^T$$

- (a) (1 point) By examining the shapes of the initial weight matrices, how many neurons do we have in the first hidden layer of the neural network? **Do not include the bias in your count.**

Answer

- (b) (1 point) How many output neurons will our neural network have?

Answer

- (c) (1 point) What is the vector \mathbf{a} whose elements are made up of the entries a_j in Equation 2 (using $x_i^{(1)}$ in place of x_i). Write your answer in terms of α and $\mathbf{x}^{(1)}$.

Answer

- (d) (1 point) **Select one:** We cannot take the matrix multiplication of our weights β and the vector $\mathbf{z} = [z_1, z_2, z_3, z_4]^T$ since they are not compatible shapes. Which of the following would allow us to take the matrix multiplication of β and \mathbf{z} such that the entries of the vector $\mathbf{b} = \beta\mathbf{z}$ are equivalent to the values of b_k in Equation 5?

- ☐ A) Remove the first row of \mathbf{z}
- ☐ B) Append a value of 1 to be the first entry of \mathbf{z} .
- ☐ C) Append an additional column of 1's to be the first column of β
- ☐ D) Append a row of 1's to be the first row of β

- (e) (1 point) **Select one:** For what values of weights (β) will Linear layer (b) be reducible to a layer with a single neuron? Assume the bias is fixed to 0.

A layer with d neurons is said to be reducible to a layer with 1 neuron, if all the other $d - 1$ neurons have output 0.

- ☐ A) β with just one column with non-zeros values
- ☐ B) β with just one row with non-zeros values
- ☐ C) β with all weights = 1
- ☐ D) β with all weights = 0
- ☐ E) β where: 1) $\beta_{ii} = 1$ and 2) $\beta_{ij} = 0$ where $i \neq j$

2. We will now derive the matrix and vector forms for the backpropagation algorithm, for example

$$\frac{\partial \ell}{\partial \alpha} = \begin{bmatrix} \frac{\partial \ell}{\partial \alpha_{10}} & \frac{\partial \ell}{\partial \alpha_{11}} & \cdots & \frac{\partial \ell}{\partial \alpha_{16}} \\ \frac{\partial \ell}{\partial \alpha_{20}} & \frac{\partial \ell}{\partial \alpha_{21}} & \cdots & \frac{\partial \ell}{\partial \alpha_{26}} \\ \vdots & \vdots & \ddots & \vdots \\ \frac{\partial \ell}{\partial \alpha_{40}} & \frac{\partial \ell}{\partial \alpha_{41}} & \cdots & \frac{\partial \ell}{\partial \alpha_{46}} \end{bmatrix}$$

The level of mathematics which you will use in this section jumps significantly in difficulty. You should always be examining the shape of the matrices and vectors and making sure that you are comparing your matrix elements with calculations of individual derivatives to make sure they match (e.g., the element of the matrix $(\frac{\partial \ell}{\partial \alpha})_{2,1}$ should be equal to $\frac{\partial \ell}{\partial \alpha_{2,1}}$). Recall that ℓ is our loss function defined in Equation 7:

Note: all vectors are column vectors (i.e. an n dimensional vector $v \in \mathbb{R}^{n \times 1}$). **Assume that all input vectors to linear layers have a bias term folded in, unless otherwise specified.** All partial derivatives should be written in [denominator layout notation](#). An example of denominator notation is that $\frac{\partial \ell}{\partial \beta} \in \mathbb{R}^{3 \times 5}$ because $\beta \in \mathbb{R}^{3 \times 5}$.

- (a) (1 point) What is the derivative $\frac{\partial \ell}{\partial \hat{y}_i}$, where $1 \leq i \leq 3$? Your answer should be in terms of y_i and \hat{y}_i . Recall that we define the loss $\ell(\hat{\mathbf{y}}, \mathbf{y})$ as follows (*note: log is a natural log*):

$$\ell(\hat{\mathbf{y}}, \mathbf{y}) = - \sum_{i=1}^3 y_i \log(\hat{y}_i) \quad (7)$$

$\partial \ell / \partial \hat{y}_i$

- (b) (1 point) What is the value of $\sum_l y_l$?

$\sum_l y_l$

- (c) (2 points) The derivative of the softmax function with respect to b_k is as follows:

$$\frac{\partial \hat{y}_l}{\partial b_k} = \hat{y}_l (\mathbb{I}[k = l] - \hat{y}_k) \quad (8)$$

where $\mathbb{I}[k = l]$ is an indicator function such that if $k = l$ then it returns value 1 and 0 otherwise.

Using this and your result from (a), write the derivative $\frac{\partial \ell}{\partial b_k}$ in a smart way such that you do not need the indicator function in Equation 8. Write your solutions in terms of \hat{y}_k, y_k . Show your work below.

Hint 1: Recall that $\frac{\partial \ell}{\partial b_k} = \sum_l \frac{\partial \ell}{\partial \hat{y}_l} \frac{\partial \hat{y}_l}{\partial b_k}$.

Hint 2: After substituting in your expressions for $\frac{\partial \ell}{\partial \hat{y}_l}$ and $\frac{\partial \hat{y}_l}{\partial b_k}$, try to rearrange terms so that you encounter the expression $\hat{y}_k \sum_l y_l$. Recall your solution to part b.

$\partial \ell / \partial b_k$

- (d) (2 points) What is the derivative $\frac{\partial \ell}{\partial \beta}$? Your answer should be in terms of $\frac{\partial \ell}{\partial \mathbf{b}}$ and \mathbf{z} .

You should first consider a single entry in this matrix: $\frac{\partial \ell}{\partial \beta_{kj}}$.

$\partial \ell / \partial \beta$

- (e) (1 point) **Select one:** Why do we use the matrix β^* (the matrix β without the first column of bias values) instead of β when calculating the derivative matrix $\frac{\partial \ell}{\partial \alpha}$? (*Hint: try drawing a computation graph with the bias unfolded*).
- ☐ A) The bias terms do not update, so there is no need to include them in backpropagation.
 - ☐ B) It is the computationally cheapest column to remove to ensure that the dimensions match.
 - ☐ C) The elements $\beta_{k,0}$ are not determined by the values of α
 - ☐ D) The derivative of loss with respect to the bias terms is always zero.
- (f) (1 point) What is the derivative $\frac{\partial \ell}{\partial \mathbf{z}}$ **without the bias term**? Your answer should be in terms of $\frac{\partial \ell}{\partial \mathbf{b}}$ and β^* .

$\partial \ell / \partial \mathbf{z}$

- (g) (1 point) What is the derivative $\frac{\partial \ell}{\partial a_j}$ in terms of $\frac{\partial \ell}{\partial z_j}$ and z_j ?

$\partial \ell / \partial a_j$

- (h) (1 point) What is the matrix $\frac{\partial \ell}{\partial \alpha}$? Your answer should be in terms of $\frac{\partial \ell}{\partial \mathbf{a}}$ and $\mathbf{x}^{(1)}$.

$\partial \ell / \partial \alpha$

3 Empirical Questions (17 points)

The following questions should be completed after you work through the programming portion of this assignment. **For any plotting questions, you must submit computer generated line graphs/curves, title your graph, label your axes, provide units (if applicable), and provide a legend in order to receive full credit.**


For these questions, **use the small dataset** and the following values for the hyperparameters unless otherwise specified:

Parameter	Value
Number of Hidden Units	50
Weight Initialization	RANDOM
Learning Rate	0.001

1. Hidden Units

- (a) (2 points) Train a single hidden layer neural network using the hyperparameters mentioned in the table above, except for the number of hidden units which should vary among **5, 20, 50, 100, and 200**. Run the optimization for 100 epochs each time.

Plot the average training cross-entropy (sum of the cross-entropy terms over the training dataset divided by the total number of training examples) of the final epoch on the y-axis vs number of hidden units on the x-axis. In the **same figure**, plot the average validation cross-entropy. The x-axis should be the number of hidden units, the y-axis should be average cross-entropy loss, and there should be one curve for validation loss and one curve for train loss.



- (b) (2 points) Examine and comment on the the plots of training and validation cross-entropy. What problem arises with too few hidden units, and why does it happen?

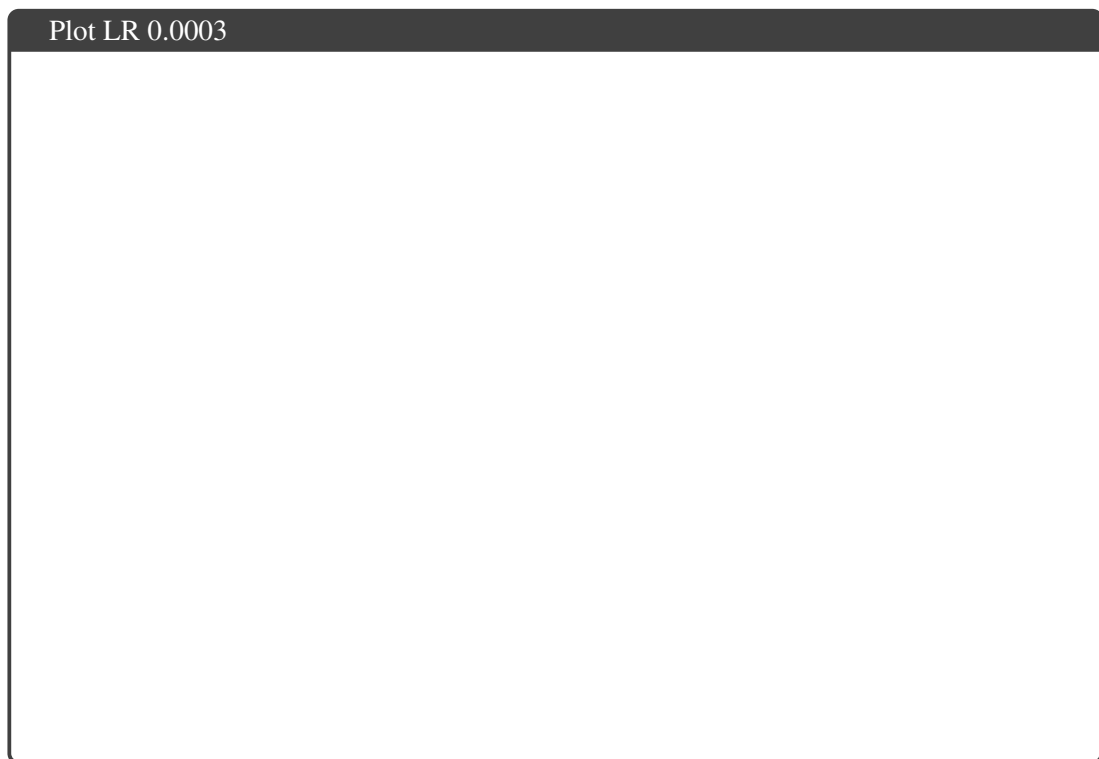

Answer

2. Learning Rate

- (a) (6 points) Train a single hidden layer neural network using the hyperparameters mentioned in the table above with the following learning rates: **0.03**, **0.003**, and **0.0003**. Run the optimization for 100 epochs each time.

Plot the average training cross-entropy on the y-axis vs the number of epochs on the x-axis for the mentioned learning rates. In the **same figure**, plot the average validation cross-entropy loss. Make a separate figure for each learning rate. The x-axis should be epoch number, the y-axis should be average cross-entropy loss, and there should be one curve for training loss and one curve for validation loss.

Plot LR 0.03



- (b) (1 point) Examine and comment on the convergence rates of the three models using the plots of training and validation cross-entropy. Are there any learning rates for which convergence is not achieved?

Answer

- (c) (1 point) Are there any learning rates that exhibit other problems? If so, describe these issues and list the learning rates that cause them.

Answer

3. Weight Initialization

- (a) (2 points) For this exercise, you can work on any data set. Initialize α and β to zero and print them out after the first few updates. For example, you may use the following command to begin:

```
$ python neuralnet.py small_train.csv small_validation.csv \
small_train_out.labels small_validation_out.labels \
small_metrics_out.txt 1 4 2 0.1
```

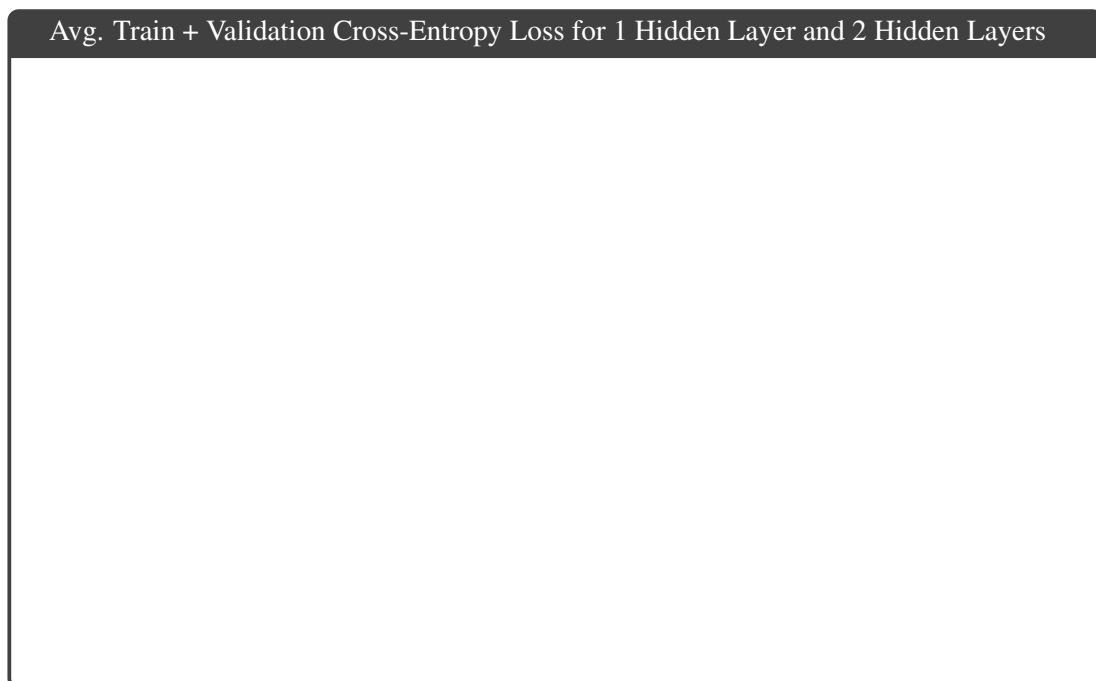
Compare the values across rows and columns in α and β . Describe the observed behavior and explain why this may happen.

Answer

4. Adding a Hidden Layer

- (a) (2 points) Now, try adding another hidden layer to your neural network. The hyperparameters for the model should be the same as the table above, except for learning rate. The **2 hidden layers** should both have a dimension of **50**, and your learning rate should be **0.003**. Run the optimization for 100 epochs. Remember that adding another hidden layer means you should add both a linear layer and a sigmoid layer in your code.

We want to compare the performance of this model with our 1 hidden layer model. So, create a plot with the following 4 lines. Plot the average training and validation cross-entropy loss for a 1 hidden layer model, using the same learning rate of **0.003** and a hidden dimension of 50 (you should have already plotted this in 2a). Additionally, plot the average training and validation cross-entropy loss for the 2 hidden layer model on the **same figure**. The x-axis should be epoch number, the y-axis should be average cross-entropy loss, and there should be four total curves: training loss and validation loss for the 1 hidden layer model, and training loss and validation loss for the 2 hidden layer model.



- (b) (1 point) Examine and comment on the difference in performance between the two model. What happens when you add an additional hidden layer? Why do you think this is happening? Frame your answer in terms of model complexity and overfitting/underfitting.

Answer

A rectangular box with a dark gray header containing the text "Answer". The main area of the box is white and empty, intended for the student's written response to the question in part (b).

4 Collaboration Questions

After you have completed all other components of this assignment, report your answers to these questions regarding the collaboration policy. Details of the policy can be found [here](#).

1. Did you receive any help whatsoever from anyone in solving this assignment? If so, include full details.
2. Did you give any help whatsoever to anyone in solving this assignment? If so, include full details.
3. Did you find or come across code that implements any part of this assignment? If so, include full details.

Your Answer

Programming (55 points)




Figure 2: 10 random images of each of the 10 letters in the OCR dataset.

5 The Task

Your goal in this assignment is to implement a neural network to classify images using a single hidden layer neural network.

6 The Datasets

Datasets We will be using a **subset** of an Optical Character Recognition (OCR) dataset. This data includes images of all 26 handwritten letters; our subset will include **only** the letters “a,” “e,” “g,” “i,” “l,” “n,” “o,” “r,” “t,” and “u.” The handout contains a small dataset with 60 samples *per class* (50 for training and 10 for validation). We will also evaluate your code on a medium dataset with 600 samples per class (500 for training and 100 for validation). Figure 2 shows a random sample of 10 images of a few letters from the dataset (not the same ones we’re classifying in this assignment).

File Format Each dataset (small, medium, and large) consists of two csv files—train and validation. Each row contains 129 columns separated by commas. The first column contains the label and columns 2 to 129 represent the pixel values of a 16×8 image in a row major format. Label 0 corresponds to “a,” 1 to “e,” 2 to “g,” 3 to “i,” 4 to “l,” 5 to “n,” 6 to “o,” 7 to “r,” 8 to “t,” and 9 to “u.”

Because the original images are black-and-white (not grayscale), the pixel values are either 0 or 1. However, you should write your code to accept arbitrary pixel values in the range $[0, 1]$. The images in Figure 2 were produced by converting these pixel values into .png files for visualization. Observe that no feature engineering has been done here; instead the neural network you build will *learn* features appropriate for the task of character recognition.

7 Model Definition

In this assignment, you will implement a single-hidden-layer neural network with a sigmoid activation function for the hidden layer, and a softmax on the output layer. Let the input vectors \mathbf{x} be of length M , and the hidden layer \mathbf{z} consist of D hidden units. In addition, let the output layer $\hat{\mathbf{y}}$ be a probability distribution over K classes. That is, each element \hat{y}_k of the output vector represents the probability of \mathbf{x} belonging to the class k .

We can compactly express this model by assuming that $x_0 = 1$ is a bias feature on the input and that $z_0 = 1$ is also fixed. In this way, we have two parameter matrices $\boldsymbol{\alpha} \in \mathbb{R}^{D \times (M+1)}$ and $\boldsymbol{\beta} \in \mathbb{R}^{K \times (D+1)}$. The extra 0th column of each matrix (i.e. $\boldsymbol{\alpha}_{:,0}$ and $\boldsymbol{\beta}_{:,0}$) hold the bias parameters.

$$\begin{aligned} a_j &= \sum_{m=0}^M \alpha_{j,m} x_m \\ z_j &= \sigma(a_j) = \frac{1}{1 + \exp(-a_j)} \\ b_k &= \sum_{j=0}^D \beta_{k,j} z_j \\ \hat{y}_k &= \text{Softmax}(\mathbf{b}) = \frac{\exp(b_k)}{\sum_{l=1}^K \exp(b_l)} \end{aligned}$$

The objective function we will use for training the neural network is the average cross entropy over the training dataset $\mathcal{D} = \{(\mathbf{x}^{(i)}, \mathbf{y}^{(i)})\}$:

$$J(\boldsymbol{\alpha}, \boldsymbol{\beta}) = -\frac{1}{N} \sum_{i=1}^N \sum_{k=1}^K y_k^{(i)} \log(\hat{y}_k^{(i)}) \quad (9)$$

In Equation 9, J is a function of the model parameters $\boldsymbol{\alpha}$ and $\boldsymbol{\beta}$ because $\hat{y}_k^{(i)}$ is the output of the neural network applied to $\mathbf{x}^{(i)}$ and is therefore implicitly a function of $\mathbf{x}^{(i)}$, $\boldsymbol{\alpha}$, and $\boldsymbol{\beta}$. $\hat{y}_k^{(i)}$ and $y_k^{(i)}$ are the k th components of $\hat{\mathbf{y}}^{(i)}$ and $\mathbf{y}^{(i)}$ respectively.

To train, you should optimize this objective function using stochastic gradient descent (SGD), where the gradient of the parameters for each training example is computed via backpropagation. You should shuffle the training points when performing SGD using the provided `shuffle` function, passing in the epoch number as a random seed. Note that SGD has a slight impact on the objective function as we are “summing” over just the current point, i , and not the entire dataset:

$$J_{SGD}(\boldsymbol{\alpha}, \boldsymbol{\beta}) = -\sum_{k=1}^K y_k^{(i)} \log(\hat{y}_k^{(i)}) \quad (10)$$

You will use the (hopefully at this point) familiar SGD update rule to update the parameters of your model:

$$\alpha_{t+1} \leftarrow \alpha_t - \gamma \frac{\partial J_{SGD}(\alpha_t, \beta_t)}{\partial \alpha_t} \quad (11)$$

$$\beta_{t+1} \leftarrow \beta_t - \gamma \frac{\partial J_{SGD}(\alpha_t, \beta_t)}{\partial \beta_t} \quad (12)$$

where γ is the learning rate, and α_t and β_t are the values of α and β at step t (similarly for α_{t+1} and β_{t+1}).

7.1 Initialization

In order to use a deep network, we must first initialize the weights and biases in the network. This is typically done with a random initialization, or initializing the weights from some other training procedure. For this assignment, we will be using two possible initializations:

RANDOM The weights are initialized randomly from a uniform distribution from -0.1 to 0.1.
The bias parameters are initialized to zero.

ZERO All weights are initialized to 0.

You must support both of these initialization schemes.

8 Implementation

Write a program `neuralnet.py` that implements an optical character recognizer using a one hidden layer neural network with sigmoid activations. Your program should learn the parameters of the model on the training data, report the cross-entropy at the end of each epoch on both train and validation data, and at the end of training write out its predictions and error rates on both datasets.

Your implementation must satisfy the following requirements:

- Use a **sigmoid** activation function on the hidden layer and **softmax** on the output layer to ensure it forms a proper probability distribution.
- Number of **hidden units** for the hidden layer should be determined by a command line flag. (More details on command line flags provided below.)
- Support two different **initialization strategies**, as described in Section 7.1, selecting between them via a command line flag.
- Use stochastic gradient descent (SGD) to optimize the parameters for one hidden layer neural network. The number of **epochs** will be specified as a command line flag.
- Set the **learning rate** via a command line flag.
- Perform stochastic gradient descent updates on the training data on the data shuffled with the provided function. For each epoch, you must reshuffle the **original** file data, not the data from the previous epoch.
- You may assume that the input data will always have the same output label space (i.e. $\{0, 1, \dots, 9\}$). Other than this, do not hard-code any aspect of the datasets into your code. We will autograde your programs on multiple data sets that include different examples.
- In case there is a tie in the output layer \hat{y} , predict the smallest index to be the label. (Hint: you shouldn't need to write extra code for tie-breaking if you are using the appropriate NumPy function.)
- Do *not* use any machine learning libraries. You may use NumPy.

Implementing a neural network can be tricky: the parameters are not just a simple vector, but a collection of many parameters; computational efficiency of the model itself becomes essential; the initialization strategy dramatically impacts overall learning quality; other aspects which we will *not* change (e.g. activation function, optimization method) also have a large effect. These tips should help you along the way:

- Try to “vectorize” your code as much as possible—this is particularly important for Python. For example, in Python, you want to avoid for-loops and instead rely on `numpy` calls to perform operations such as matrix multiplication, transpose, subtraction, etc., over an entire `numpy` array at once. Why? Because those calls can be much faster! Those operations are actually implemented in fast C code, which won’t get bogged down the way a high-level scripting language like Python will.
- Implement a finite difference test to check whether your implementation of backpropagation is correctly computing gradients. If you choose to do this, comment out this functionality once your backward pass starts giving correct results and before submitting to Gradescope—since it will otherwise slow down your code.

8.1 Command Line Arguments

The autograder runs and evaluates the output from the files generated, using the following command:

```
$ python3 neuralnet.py [args...]
```

Where above `[args...]` is a placeholder for nine command-line arguments: `<train_input>` `<validation_input>` `<train_out>` `<validation_out>` `<metrics_out>` `<num_epoch>` `<hidden_units>` `<init_flag>` `<learning_rate>`. These arguments are described in detail below:

1. `<train_input>`: path to the training input `.csv` file (see Section 6)
2. `<validation_input>`: path to the validation input `.csv` file (see Section 6)
3. `<train_out>`: path to output `.labels` file to which the prediction on the *training* data should be written (see Section 8.2)
4. `<validation_out>`: path to output `.labels` file to which the prediction on the *validation* data should be written (see Section 8.2)
5. `<metrics_out>`: path of the output `.txt` file to which metrics such as train and validation error should be written (see Section 8.3)
6. `<num_epoch>`: integer specifying the number of times backpropagation loops through all of the training data (e.g., if `<num_epoch>` equals 5, then each training example will be used in backpropagation 5 times).
7. `<hidden_units>`: positive integer specifying the number of hidden units.
8. `<init_flag>`: integer taking value 1 or 2 that specifies whether to use RANDOM or ZERO initialization (see Section 7.1 and Section 7)—that is, if `init_flag==1` initialize your weights randomly from a uniform distribution over the range `[-0.1, 0.1]` (i.e. RANDOM), if `init_flag==2` initialize all weights to zero (i.e. ZERO). For both settings, **always initialize bias terms to zero.**
9. `<learning_rate>`: float value specifying the learning rate for SGD.

As an example, if you implemented your program in Python, the following command line would run your program with 4 hidden units on the small data provided in the handout for 2 epochs using zero initialization

and a learning rate of 0.1.

```
python3 neuralnet.py small_train.csv small_validation.csv \
small_train_out.labels small_validation_out.labels \
small_metrics_out.txt 2 4 2 0.1
```

The command line arguments are parsed for you in `neuralnet.py` using the Python builtin `argparse` package.

8.2 Output: Labels Files

Your program should write two output `.labels` files containing the predictions of your model on training data (`<train_out>`) and validation data (`<validation_out>`). Each should contain the predicted labels for each example printed on a new line. Use `\n` to create a new line.

Your labels should exactly match those of a reference implementation – this will be checked by the autograder by running your program and evaluating your output file against the reference solution.

We've included code which outputs correctly formatted labels for you in `neuralnet.py`.

Note: You should output your predicted labels using the same *integer* identifiers as the original training data. You should also insert an empty line (using `'\n'`) at the end of each sequence (as is done in the input data files).

8.3 Output: Metrics

Generate a file where you report the following metrics:

cross entropy After each epoch, report mean cross entropy on the training data `crossentropy(train)` and validation data `crossentropy(validation)` (See Equation 9). These two cross-entropy values should be reported at the end of each epoch and prefixed by the epoch number. For example, after the second pass through the training examples, these should be prefixed by `epoch=2`. The total number of train losses you print out should equal `num_epoch`—likewise for the total number of validation losses.

error After the final epoch (i.e. when training has completed fully), report the final training error `error(train)` and validation error `error(validation)`.

A sample output for the small data set is given below. It contains the train and validation losses for the first 2 epochs and the final error rate output by the command given at the end of section 8.1 Command Line Arguments.

```
epoch=1 crossentropy(train): 2.1415670910950144
epoch=1 crossentropy(validation): 2.1502231738985618
epoch=2 crossentropy(train): 1.8642629963917074
epoch=2 crossentropy(validation): 1.8780601379038728
error(train): 0.73
error(validation): 0.72
```

Take care that your output has the exact same format as shown above. There is an equal sign = between the word `epoch` and the epoch number, but no spaces. There should be a single space after the epoch number (e.g. a space after `epoch=1`), and a single space after the colon preceding the metric value (e.g. a space

after `epoch=1 crossentropy(train):`). Each line should be terminated by a Unix line ending `\n`. We've included code which correctly formats your metrics for you in `neuralnet.py`.

8.4 Unit Tests

To help you debug your code, we've included a unit test file in your handout, `tests.py`. This is a *nonexhaustive* set of unit tests which are meant to help you make sure your implementation is correct. Passing these tests does not guarantee a full score in your Gradescope submission, but it will help you identify functions which have errors. Do not edit these tests as we will not be able to guarantee correctness if you modify these tests.

To run the unit tests, run the following command lines:

```
To run one test: python -m unittest tests.TestRandomInit.test_shape
To run one set of tests: python -m unittest tests.TestRandomInit
To run all tests: python -m unittest tests
```

If the above commands give you errors, try replacing `python` with `python3`.

9 Gradescope Submission

You should submit your `neuralnet.py` to Gradescope. **Any other files will be deleted.** Please do not use any other file name for your implementation. This will cause problems for the autograder to correctly detect and run your code.

Make sure to read the autograder output carefully. The autograder for Gradescope prints out some additional information about the tests that it ran. For this programming assignment we've specially designed some buggy implementations that you might implement and will try our best to detect those and give you some more useful feedback in Gradescope's autograder. Make wise use of autograder's output for debugging your code.

Note: For this assignment, you may make up to **10** submissions to Gradescope before the deadline, but only your last submission will be graded.

10 Module-Based Neural Net Implementation

10.1 Module-based Method of Implementation

Module-based automatic differentiation (AD) is a technique that has long been used to develop libraries for deep learning, and is the method of implementation that you are encouraged to follow in this assignment. Dynamic neural network packages are those that allow a specification of the computation graph dynamically at runtime, such as Torch¹, PyTorch², and DyNet³—these all employ module-based AD in the sense that we will describe here.⁴

The key idea behind module-based AD is to componentize the computation of the neural-network into layers. Each layer can be thought of as consolidating numerous nodes in the computation graph (a subset of them) into one *vector-valued* node. Such a vector-valued node should be capable of the following and we call each one a **module** (corresponding to a class in Python):

1. Forward computation of output $\mathbf{b} = [b_1, \dots, b_B]$ given input $\mathbf{a} = [a_1, \dots, a_A]$ via some differentiable function f . That is, $\mathbf{b} = f(\mathbf{a})$.
2. Backward computation of the gradient of the input $\mathbf{g}_\mathbf{a} = \frac{\partial J}{\partial \mathbf{a}} = [\frac{\partial \ell}{\partial a_1}, \dots, \frac{\partial \ell}{\partial a_A}]$ given the gradient of output $\mathbf{g}_\mathbf{b} = \frac{\partial J}{\partial \mathbf{b}} = [\frac{\partial \ell}{\partial b_1}, \dots, \frac{\partial \ell}{\partial b_B}]$, where J is the final real-valued output of the entire computation graph. This is done via the chain rule $\frac{\partial \ell}{\partial a_i} = \sum_{j=1}^B \frac{\partial \ell}{\partial b_j} \frac{\partial b_j}{\partial a_i}$ for all $i \in \{1, \dots, A\}$.

10.1.1 Module Definitions

In our implementation, the modules we will define for our neural network correspond to a Linear layer and a Sigmoid layer. While it is possible to additionally define modules for Softmax and Cross-Entropy, we keep them as functions for simplicity (though you are welcome to turn them into modules as well if you wish). Each module defines a forward method $\mathbf{b} = \text{*.FORWARD}(\mathbf{a})$, and a backward method $\mathbf{g}_\mathbf{a} = \text{*.BACKWARD}(\mathbf{g}_\mathbf{b})$. In other words, the forward method yields the output, \mathbf{b} , given the input, \mathbf{a} ; meanwhile, the backward method yields the gradient with respect to the input, $\mathbf{g}_\mathbf{a}$, given the gradient with respect to the output, $\mathbf{g}_\mathbf{b}$. Each module may also store certain values as appropriate (for instance, the Linear layers store the weight matrices α, β).

Note that for linear modules in particular, while the gradients with respect to the inputs and outputs are passed in and out of the modules, the gradients with respect to the weight matrices, \mathbf{g}_α and \mathbf{g}_β are **not**. This follows the object-oriented design principle of encapsulation – \mathbf{g}_α and \mathbf{g}_β are only required by their respective linear layers, so we only store them within the linear module itself. Later on, they will be used for a SGD update, which will be performed by an additional STEP method. (Alternatively, since the SGD update for this assignment is always applied per example, you may directly perform the SGD update within BACKWARD, though you should be extra careful about the order of your operations.)

Further, if you've completed Written Question 2, you might notice that though we only pass $\mathbf{g}_\mathbf{b}$, the gradient with respect to the module output, into $\text{*.BACKWARD}(\mathbf{g}_\mathbf{b})$, we may need more than that to calculate some of the layer's gradients. Specifically, if you inspect your expressions for the gradient, you may notice that they use certain values from the forward pass. Hence, in your forward methods, you will want to **cache** certain values to be used later on in the backward pass. In the starter code, we do so via a `cache` dictionary

¹<http://torch.ch/>

²<http://pytorch.org/>

³<https://dymnet.readthedocs.io>

⁴Static neural network packages are those that require a static specification of a computation graph which is subsequently compiled into code. Examples include Theano, Tensorflow, and CNTK. These libraries are also module-based but the particular form of implementation is different from the dynamic method we recommend here.

as a class attribute, wherein you can store parameter names as keys that map to their cached values.

Finally, you'll want to pay close attention to the dimensions that you pass into and return from your modules. The dimensions A and B are specific to the module such that we have input $\mathbf{a} \in \mathbb{R}^A$, output $\mathbf{b} \in \mathbb{R}^B$, gradient of output $\mathbf{g}_a \triangleq \nabla_{\mathbf{a}} J \in \mathbb{R}^A$, and gradient of input $\mathbf{g}_b \triangleq \nabla_{\mathbf{b}} J \in \mathbb{R}^B$.

We have provided you the pseudocode for the Linear Module as an example.

Linear Module

```

1: procedure FORWARD( $\mathbf{a}$ )
2:   Compute  $\mathbf{b}$  using this layer's weight matrix
3:   Cache intermediate value(s) for the backward pass           ▷ See Written Question 1.2(d)
4:   return  $\mathbf{b}$ 
5: procedure BACKWARD( $\mathbf{g}_b$ )
6:   Bring the necessary cached values into scope
7:   Compute  $\mathbf{g}_\alpha$ 
8:   Compute  $\mathbf{g}_a$ 
9:   Store  $\mathbf{g}_\alpha$  for subsequent SGD update
10:  return  $\mathbf{g}_a$ 
11: procedure STEP()
12:  Apply SGD update to weights  $\alpha$  using stored gradient  $\mathbf{g}_\alpha$ 

```

10.1.2 Module-based AD for Neural Network

Given that our one hidden layer neural network is a composition of modules, we can define functions for forward and backward propagation using these modules as follows:

Algorithm 1 Forward Computation

```

1: procedure NNFORWARD(Training example ( $\mathbf{x}, \mathbf{y}$ ))
2:    $\mathbf{a} = \text{LINEAR1.FORWARD}(\mathbf{x})$            ▷ First linear layer module
3:    $\mathbf{z} = \text{SIGMOID.FORWARD}(\mathbf{a})$          ▷ Sigmoid activation module
4:    $\mathbf{b} = \text{LINEAR2.FORWARD}(\mathbf{z})$          ▷ Second linear layer module
5:    $\hat{\mathbf{y}} = \text{SOFTMAX}(\mathbf{b})$              ▷ Softmax function
6:    $J = \text{CROSSENTROPY}(\mathbf{y}, \hat{\mathbf{y}})$        ▷ CrossEntropy function
7:   return  $J, \hat{\mathbf{y}}$ 

```

Algorithm 2 Backpropagation

```

1: procedure NNBACKWARD( $\mathbf{y}, \hat{\mathbf{y}}$ )
2:    $g_J = \frac{\partial J}{\partial J} = 1$            ▷ Base case
3:    $\mathbf{g}_b = \text{DSOFTMAXCROSSENTROPY}(\mathbf{y}, \hat{\mathbf{y}}, g_J)$    ▷ See Written Question 1.2(b)
4:    $\mathbf{g}_z = \text{LINEAR2.BACKWARD}(\mathbf{g}_b)$ 
5:    $\mathbf{g}_a = \text{SIGMOID.BACKWARD}(\mathbf{g}_z)$ 
6:    $\mathbf{g}_x = \text{LINEAR1.BACKWARD}(\mathbf{g}_a)$            ▷ We discard  $\mathbf{g}_x$ 

```

Here's the big takeaway: we can actually view these two functions as themselves defining another module! It is a 1-hidden layer neural network module. That is, the cross-entropy of the neural network for a single

training example is *itself* a differentiable function and we know how to compute the gradients of its inputs, given the gradients of its outputs.

10.2 Training Procedure

Consider the neural network described in Section 7 applied to the i th training example (\mathbf{x}, \mathbf{y}) where \mathbf{y} is a one-hot encoding of the true label. Our neural network outputs $\hat{\mathbf{y}} = h_{\alpha, \beta}(\mathbf{x})$, where α and β are the parameters of the first and second layers respectively and $h_{\alpha, \beta}$ is a one-hidden layer neural network with a sigmoid activation and softmax output. The loss function is negative cross-entropy $J = \ell(\hat{\mathbf{y}}, \mathbf{y}) = -\mathbf{y}^T \log(\hat{\mathbf{y}})$. $J = J_{\mathbf{x}, \mathbf{y}}(\alpha, \beta)$ is actually a function of our training example (\mathbf{x}, \mathbf{y}) as well as our model parameters α, β , though we write just J for brevity.

In order to train our neural network, we are going to apply stochastic gradient descent (SGD). Because we want the behavior of your program to be approximately deterministic for testing on Gradescope, we will require that (1) you should use *our provided* shuffle function to shuffle your data at the start of each epoch and (2) you will use a fixed learning rate.

SGD proceeds as follows, where E is the number of epochs and γ is the learning rate.

Algorithm 3 Training with Stochastic Gradient Descent (SGD)

```

1: procedure SGD(Training data  $\mathcal{D}_{train}$ , test data  $\mathcal{D}_t$ )
2:   Initialize parameters  $\alpha, \beta$  ▷ Use either RANDOM or ZERO from Section 7.1
3:   for  $e \in \{1, 2, \dots, E\}$  do ▷ For each epoch
4:      $\mathcal{D} = \text{SHUFFLE}(\mathcal{D}_{train}, e)$ 
5:     for  $(\mathbf{x}, \mathbf{y}) \in \mathcal{D}$  do ▷ For each training example
6:       Compute neural network forward prop:
7:        $J, \hat{\mathbf{y}} = \text{NN.FORWARD}(\mathbf{x}, \mathbf{y}, \alpha, \beta)$ 
8:       Compute gradients via backprop:
9:        $\left. \begin{array}{l} \mathbf{g}_\alpha = \frac{\partial J}{\partial \alpha} \\ \mathbf{g}_\beta = \frac{\partial J}{\partial \beta} \end{array} \right\} \text{ given by NN.BACKWARD}(\mathbf{y}, \hat{\mathbf{y}})$ 
10:      Update parameters with SGD updates  $\mathbf{g}_\alpha, \mathbf{g}_\beta$ :
11:       $\alpha \leftarrow \alpha - \gamma \mathbf{g}_\alpha$ 
12:       $\beta \leftarrow \beta - \gamma \mathbf{g}_\beta$ 
13:      Evaluate training mean cross-entropy  $J_{\mathcal{D}}(\alpha, \beta)$ 
14:      Evaluate test mean cross-entropy  $J_{\mathcal{D}_t}(\alpha, \beta)$ 
15:   return parameters  $\alpha, \beta$ 

```

10.3 Testing Procedure

At test time, we output the most likely prediction for each example:

Algorithm 4 Prediction at Test Time

```

1: procedure PREDICT(Unlabeled train or test dataset  $\mathcal{D}'$ )
2:   for  $\mathbf{x} \in \mathcal{D}'$  do
3:     Compute neural network prediction  $\hat{\mathbf{y}} = h(\mathbf{x})$ 
4:     Predict the label with highest probability  $l = \text{argmax}_k \hat{y}_k$ 

```
